

DOWNLOAD PDF DOCUMENT



TEST MISSING ANGLES QUA...

DOWNLOAD DOCUMENT NOW

Updated: 11/05/2017

DISCLAIMER:

CHAUVIN.CO uses the following test missing angles quadrilateral triangles book available for free PDF download which is also related with

TEST MISSING ANGLES QUADRILATERAL TRIANGLES

test missing angles quadrilateral triangles can be easily downloaded from our library. Don't you believe? It is completely free. You just have to register on our site - click on the link below and answer simple questions. It will provide you for free access to test missing angles quadrilateral triangles and other eBooks. We ask you to pass a registration because of hard hackers' attacks that knock out of service our library and prevent our users from downloading test missing angles quadrilateral triangles as well as other books when it is necessary. When pass the registration, you can be sure of free and unlimited access to test missing angles quadrilateral triangles and lots of other PDF data. Files can be downloaded on your device when you want. Therefore, if you still need test missing angles quadrilateral triangles and cannot download it from other sites, register on our site and get a free access to a rich collection of eBooks right now. Save your time and efforts.

DOWNLOAD NOW

DOWNLOAD PDF DOCUMENT

DOWNLOAD PDF DOCUMENT

TEST MISSING ANGLES QUA...

7-3 WKST SOLUTIONS

1) Acute 2) Isosceles 3) 67o 4) Obtuse, Isosceles, $x = 38$ o 5) Acute, scalene, $x = 41$ o 6) Right, Scalene, $x = 24$ o
Math A CC8 Today s Targets: Find Missing Angle Measures in Triangles p.389 ...

File name: CC8 5-3 Notes Angles of Triangles.pdf

[Download now or Read Online](#)

73745_U08_ENFL_CLN1.INDD

Family Letter for Unit 8 Dear Family, Vocabulary During the next few weeks, our math class ray Part of a line that starts at an will be learning about geometry. We will study endpoint and goes on forever in one angles, lines, triangles, and quadrilaterals. direction. angle An angle is formed by two rays You can expect to see work involving finding with the same endpoint. the measure of missing an...

File name: 5hmmca_pe08_fl_en.pdf

[Download now or Read Online](#)

MICROSOFT WORD - MATHEMATICS EARLY ENTRY HOLIDAY PACK ANSWERS.DOC

Mathematics Early Entry Holiday Workbook ANSWERS
Session 1: To be able to find the area of triangles and shapes madeup of triangles and rectangles. Session 2: To be able to find missing angles in triangles. ...

File name: Mathematics Early Entry Holiday Pack answers.pdf

[Download now or Read Online](#)

PUPIL BOOK 5-7: UNIT 2

2 2 Angles and proofIdentify interior and exterior angles in triangles and quadrilateralsCalculate interior and exterior angles of triangles and quadrilateralsUnderstand the idea of proofRecognise the difference between conventions de nitions andderived propertiesWhy learn thisAngles can be crucially importantin some extreme sportsinterior angleInterior and exterior angles add up to 180 Level 5ext...

File name:





















[Download now or Read Online](#)

DOWNLOAD PDF DOCUMENT

DOWNLOAD PDF DOCUMENT

Here below another book similar with:

TEST MISSING ANGLES QUA...

-  [test missing angles quadrilateral triangles](#)
-  [quadrilateral proofs with answers](#)
-  [quadrilateral proofs](#)
-  [geometry right triangles and trigonometry test packet](#)
-  [fresh vegetable and fruit juices whats missing in your body](#)
-  [sample apology letter for missing work medication](#)
-  [caliper which tile is missing](#)
-  [missing percentages grid](#)
-  [central and inscribed angles kuta answer key](#)
-  [complementary supplementary vertical angles algebra](#)
-  [algebra applications with angles instructional fair](#)
-  [pictures of objects from strange angles](#)
-  [cryptic quiz answer key 120 angles](#)
-  [geometry concepts related angles answers](#)
-  [similar polygons and triangles answer key](#)
-  [math ncert similarity of triangles solutions](#)
-  [regiomontanus on triangles](#)
-  [quiz for solving special right triangles](#)
-  [perimeter and area using special right triangles](#)
-  [white plains ratio and proportion similar triangles](#)

DOWNLOAD PDF DOCUMENT